

3rd class Math Group Work- Ms. Sheridan

Week: Monday 25th May- Friday 29th May

Hello girls,

I hope everyone is keeping nice and safe. I have attached below a list of daily work for you to complete over the next week if you can. Just try your best. If you get stuck, please don't worry just move on to the next question.

I am really looking forward to seeing everyone again 😊

See you soon,

Ms. Sheridan

Monday

- Tables- Multiplication – x8. Revise 8 times tables and learn off by heart. If possible, play this game to revise your 8 times tables.

<https://www.timestables.com/8-times-table.html>

Time:

Have a look at the party invitation below and try answer the questions 🤔

A In the zoo

1. What time does Paul's party start?
2. Is the party in the morning or the afternoon?
3. Where is Paul's party?
4. How long will Paul's party last?
5. If it takes **15** minutes to get to the zoo from Paul's house, **what time will they arrive at the zoo?**
6. Remembering that it takes **15** minutes to get to and from the zoo, **how long will they spend in the zoo if they get back to Paul's house at 5:30?**
7. What animals would you like to visit if you went to the zoo?
Put them in order with your favourite first.
8. How much would it cost for **5** children and **2** adults to get into the zoo?



PRICES

Child: €4
Adult: €6.50

Tuesday

- Tables- Multiplication – x8. Revise 8 times tables and learn of by heart. If possible, play this game to revise your 8 times tables.

<http://www.math-play.com/times-table-game-8/concentration-times-table-game-8.html>

Remember- Hours: Minutes

Have a look back at last week's work if you get stuck 😊

B Answer the questions.

1. A football match started at **11:10am**. It lasted for **35 minutes**. **What time did it end?**
2. During a test, Max answered **one** question every **5 minutes**. **How long did it take him to answer 10 questions?**
3. Hannah baked a birthday cake for her mum. She put the cake into the oven at **2:30** and left it to cook for **40 minutes**. **What time was it when she took out the cake?**

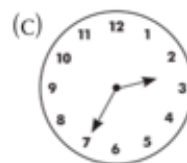
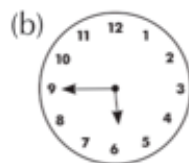
Wednesday

- Tables- Multiplication – x9. Revise 9 times tables and learn off by heart. If possible, play this game to revise your 9 times tables.

<https://www.timestables.com/9-times-table.html>

B Do it!

1. What time does each clock show?



2. Draw hands on clock pictures to show each time.

(a) 10 past 5

(b) $\frac{1}{4}$ to 6

(c) 5 to 11

(d) 20 past 10

Thursday

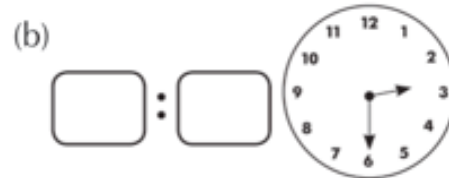
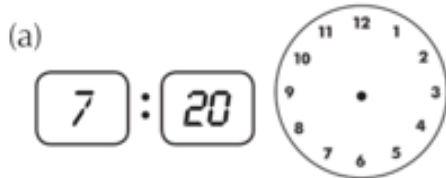
- Tables- Multiplication – x9. Revise 9 times tables and learn off by heart. If possible, play this game to revise your 9 times tables.

<https://www.timestables.com/9-times-table.html>

3. Write the following times in digital. The first one is done for you.

(a) 10 past 3 = **3:10** (b) 20 to 7 = ____ (c) 25 past 9 = ____ (d) $\frac{1}{4}$ to 12 = ____

4. Show the same time on both clocks.



Friday

- Ask someone at home to test you on your 8 & 9 times tables. Then test them on their times tables.

Well done girls on another great week's work! Have a nice weekend 😊